

TRAFIKDAG

4. KLASSE

Navn:



Se min by

Hvad kan du se på billedet?



- 1 _____
- 2 _____
- 3 _____
- 4 _____
- 5 _____
- 6 _____

- 7 _____
- 8 _____
- 9 _____
- 10 _____
- 11 _____
- 12 _____



At vise vej



Ida skal i skole, men hun skal have sit løbehjul og skoletaske med.
Hjælp hende med at finde vej:

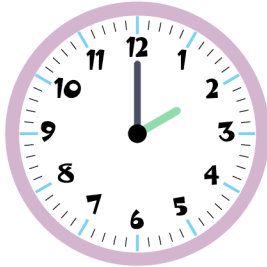
SÆTNING

Se på billedet og skriv en sætning

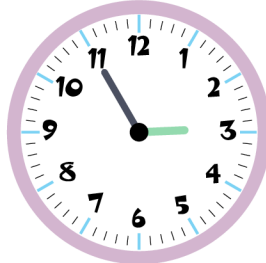


Hvad er klokken?

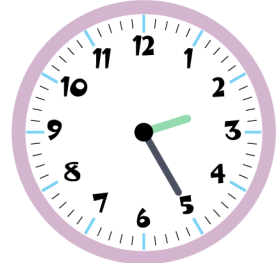
Tegn en cirkel om det rigtige svar




12:00 **14:00**



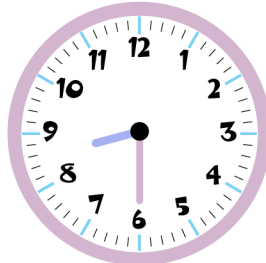
14:55 **13:55**




12:05 **14:25**



18:45 **7:09**

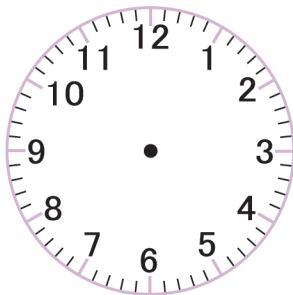


9:30 **8:30**

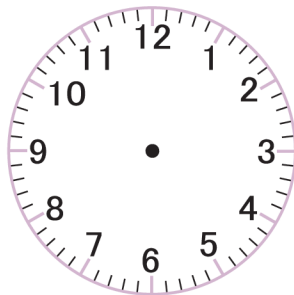


16:10 **4:10**

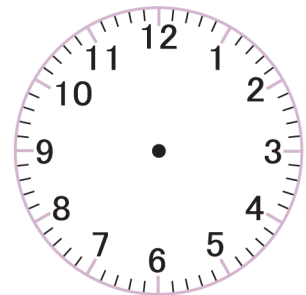
Tegn visere, så det passer med tiden



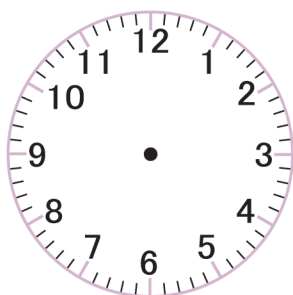
6:00



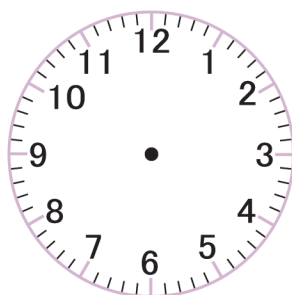
8:30



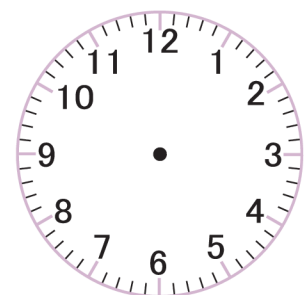
10:15



12:45



12:55



15:20

Hvad er klokken?

Tegn de rigtige visere

